



NAME: _____ **DATE:** _____ **CLASS: IV SEC:** _____

I. Select the correct options and answer the following.


1. The beak of a bird is shown below. Which of the options do you think is correct about eating habits of this bird?



- a. It catches fish and worms from the water.
- b. It cracks nuts and seeds.
- c. It tears the flesh of other animals.

2. Which of the following types of beaks is used to pick small grains?

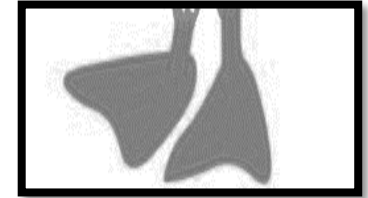
- a. only 1
- b. only 2
- c. both 1 and 2



Always Question, Always Wonder!

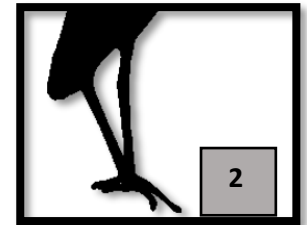
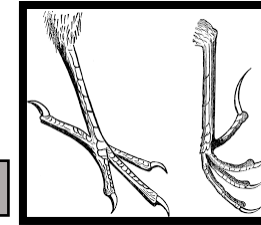
3. Given below is the foot of a bird. Which of the following is true about that bird?

- a. It catches prey to eat with its feet.
- b. It swims in water.
- c. It generally climbs tree.



4. Given below are feet of different birds. Which of them are designed to walk in muddy sand or water?

- a. only 1
- b. only 2
- c. both 1 and 2



5. The beak of a bird is shown on the right. Which of the following options do you think is true about the eating habits of this bird?

- a. It sucks nectar from flower.
- b. It cracks nuts and tear fruits.
- c. It eats mainly worms in water.



II. Observe the image and answer the following questions.

1. Name the bird shown in the picture.

2. What is the reason that the bird ride on this animal?

